



SUBTRACTION




Cross out the number of items listed below and solve the subtraction equation to the right.




$$5 - 2 = \underline{\quad}$$




$$3 - 2 = \underline{\quad}$$



$$4 - 1 = \underline{\quad}$$



$$3 - 1 = \underline{\quad}$$



$$5 - 1 = \underline{\quad}$$