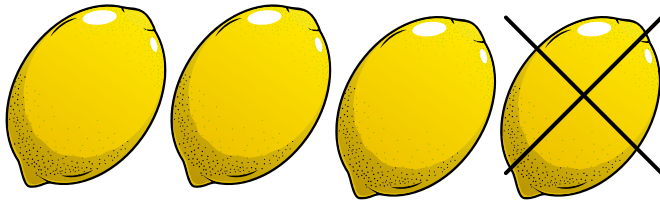



SUBTRACTION


Fill out the circle with the correct answer.




$$4 - 1 = \bigcirc$$




$$3 - 1 = \bigcirc$$



$$5 - 3 = \bigcirc$$



$$4 - 2 = \bigcirc$$



$$2 - 1 = \bigcirc$$