



Positions - Left Middle Right


Look at the pictures and determine the position of the items below - *Left - Middle - Right*



1) The red car is in (on) the _____.



2) The red ball is on (in) the _____.



3) The strawberry is on (in) the _____.