

## Positions - Left / Right


Look at the pictures and determine the position of the items below - *Left or Right*




\_\_\_\_\_



\_\_\_\_\_




\_\_\_\_\_



\_\_\_\_\_



\_\_\_\_\_



\_\_\_\_\_