


COUNTING FROM 7 TO 10


Count the number of items below and circle the correct answer.

How many bananas are in the picture ?




7 8 9

How many tomatoes are in the picture ?



1 0 8 9

How many balls are in the picture ?



7 9 8