



# Addition

Find the sum of the objects shown in the pictures.



$$3 + 2 = \underline{\quad}$$




$$1 + 1 = \underline{\quad}$$




$$2 + 2 = \underline{\quad}$$



$$1 + 2 = \underline{\quad}$$



$$1 + 0 = \underline{\quad}$$



$$3 + 1 = \underline{\quad}$$

